



## Admission Exam Sample

### PART (I) GENERAL KNOWLEDGE (15 MULTIPLE CHOICE QUESTIONS – 15 MINUTES)

#### Example(1)

Three of the following four are alike in a certain way and so form a group, which is the one that does not belong to the group?

- (a) Carpet                      (b) Floor                      (c) Parquet                      (d) Marble

#### Example(2)

Statements: Some towers are pillars. Some pillars are buildings. All buildings are flats. No flat house.

- Conclusions: I. No building is house.  
II. Some towers are houses.  
III. Some towers are flats.

- (a) None follows                      (b) All follow                      (c) Only I follows                      (d) Only II and III follow

#### Example(3)

Guernica is one of the famous art work of:

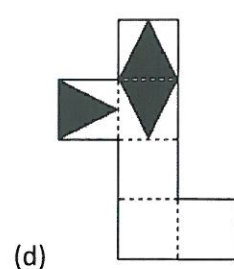
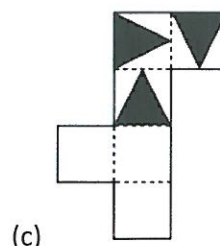
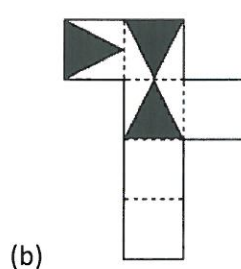
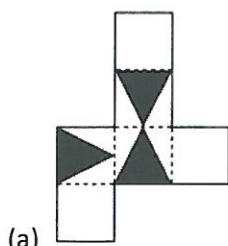
- (a) Claude Monet  
(b) Pablo Picasso  
(c) Piet Mondrian  
(d) Vincent van Gogh



### PART (II) SPATIAL REASONING (15 MULTIPLE CHOICE QUESTIONS – 15 MINUTES)

#### Example(1)






Which pattern can be folded to make the cube shown.





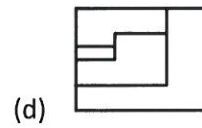
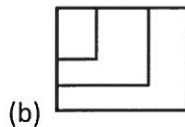
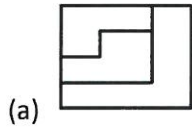
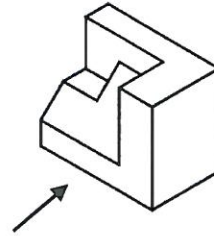
**Example(2)**

Which group of shapes can be assembled to make the shape shown?



**Example(3)**

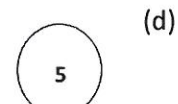

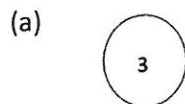
Identify the correct elevation as indicated by the arrow.



**PART (III) INDUCTIVE REASONING (10 MULTIPLE CHOICE QUESTIONS – 10 MINUTES)**

**Example(1)**

What is the next logical step in the sequence?

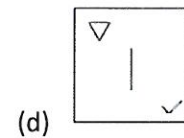
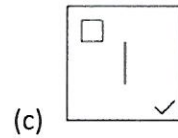
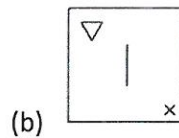
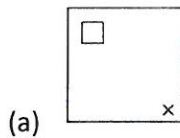
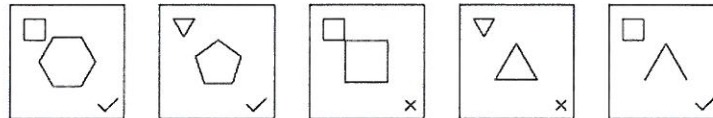



*Handwritten signature*



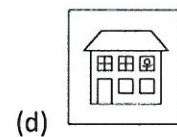
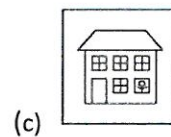
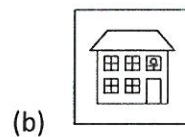
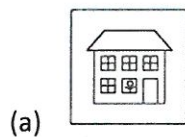
**Example(2)**

What is the next logical step in the sequence?



**Example(3)**

What is the next logical step in the sequence?



**PART (IV) FREEHAND DRAWING SKILLS (45 MINUTES)**

**Example**

From a balcony of your fourth floor apartment you are looking at a small green roundabout intersecting 4 roads and surrounded by high-rise buildings. The roundabout is planted and has a sculpture in the middle.

Depict the scene on a busy sunny day within a rectangle 40 cm x 28 cm and using the appropriate pencil as a medium.

1.48



**PART (V) CREATIVITY SKILLS (45 MINUTES)**


Sixteen wooden cubes (Hollow and / or Solid) of different colors are available with you. Make use of these cubes to create a **Display Shelf Furniture** that can be displayed in **One** of the following spaces:

- Children bedroom
- Waiting room of a Healthcare Clinic
- Living room

Please note that the cubes could intersect with each other and may be of different sizes. The selection of the colors should be appropriate to the chosen space.

A sample is given below (Note this example does not reflect the exact requirement).

**Draw a 3-dimensional view of your Design.**



١.٢٨